

Name: \_\_\_\_\_  
 Mr. Willis  
 Biology: \_\_\_\_\_  
 Date: \_\_\_\_\_

Unit II  
 Ecology  
 Need extra help?  
 Check out <http://www.nwr1biology.com>

# II

## Food Chains and Webs --- "What's for dinner?"

Every organism needs to **obtain energy** in order to live. For example, **plants get energy from the sun**, some animals eat plants, and some animals eat other animals.

A **food chain** is the sequence of **who eats whom** in a biological community (an ecosystem) to obtain nutrition. A food chain starts with the **primary energy source**, usually the **sun** or boiling-hot deep sea vents. The next link in the chain is an **organism that makes its own food** from the primary energy source -- an example is **photosynthetic plants** that make their own food from sunlight (using a process called **photosynthesis**) and **chemosynthetic bacteria** that make their food energy from chemicals in hydrothermal vents. These are called **autotrophs** or **primary producers**.

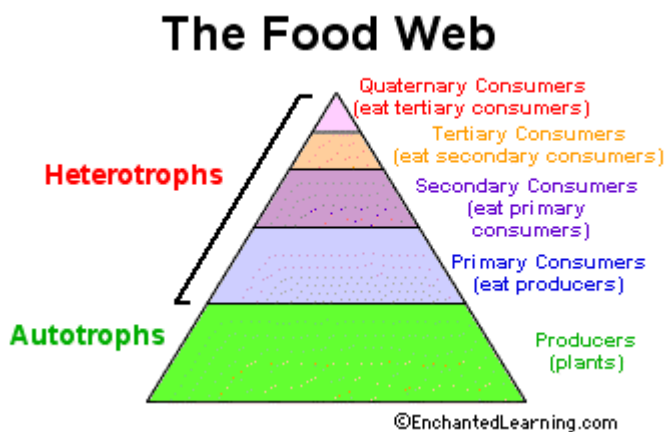
### Sample Food Chains

Trophic Level	Grassland Biome	Pond Biome	Ocean Biome
Primary Producer	grass ↓	algae ↓	phytoplankton ↓
Primary Consumer	grasshopper ↓	mosquito larva ↓	zooplankton ↓
Secondary Consumer	rat ↓	dragonfly larva ↓	fish ↓
Tertiary Consumer	snake ↓	fish ↓	seal ↓
Quaternary Consumer	hawk ↓	raccoon ↓	white shark ↓

Next come organisms that eat the autotrophs; these organisms are called **herbivores** or **primary consumers** -- an example is a rabbit that eats grass. The next link in the chain is animals that eat herbivore - these are called **secondary consumers** -- an example is a snake that eats rabbits. In turn, these animals are eaten by larger **predators** -- an example is an owl that eats snakes. The **tertiary consumers** are eaten by **quaternary consumers** -- an example is a hawk that eats owls. Each food chain ends with a **top predator** and animal with **no natural enemies** (like an alligator, hawk, or polar bear).

**Food Chain Questions**

1. What travels through a food chain or web?
2. What is the ultimate energy for all life on Earth?
3. Food chains start with what?
4. The 1<sup>st</sup> organism in a food chain must always be what type of organism?
5. Name 2 food making processes.
6. Where do chemosynthetic bacteria get their energy?
7. Define herbivore.
8. Herbivores are also called \_\_\_\_\_.
9. What are animals called that feed on herbivores?
10. Secondary consumers are eaten by larger \_\_\_\_\_.
11. \_\_\_\_\_ consumers eat secondary consumers.
12. Make a food chain with a producer and 3 consumers.



The arrows in a food chain show the flow of **energy**, from the sun or hydrothermal vent to a top predator. As the energy flows from organism to organism, energy is lost at each step. A network of many **food chains** is called a **food web**.

**Trophic Levels:**

The trophic level of an organism is the position it holds in a food chain.

1. **Primary producers** (organisms that make their own food from sunlight and/or chemical energy from deep sea vents) are the base of every food chain - these organisms are called **autotrophs**. **Primary consumers** are animals that eat primary producers; they are also called **herbivores** (plant-eaters).
2. **Secondary consumers** eat primary consumers. They are **carnivores** (meat-eaters) and **omnivores** (animals that eat both animals and plants).
3. **Tertiary consumers** eat secondary consumers.
4. **Quaternary consumers** eat tertiary consumers.
5. Food chains "end" with top predators, animals that have little or no natural enemies.

When any organism dies, it is eventually eaten by **detritivores** (like vultures, worms and crabs) and broken down by **decomposers** (mostly bacteria and fungi), and the exchange of energy continues.

Some organisms' position in the food chain **can vary as their diet differs**. For example, when a bear eats berries, the bear is functioning as a **primary consumer**. When a bear eats a plant-eating rodent, the bear is functioning as a **secondary consumer**. When the bear eats salmon, the bear is functioning as a **tertiary consumer** (this is because salmon is a secondary consumer, since salmon eat herring that eat zooplankton that eat phytoplankton, that make their own energy from sunlight). Think about how **people's place in the food chain varies - often within a single meal!**

### Food Web Questions

1. What is used to indicate the flow of energy in a food chain or web?
2. What happens to energy as we move from step to step in a chain or web?
3. Define food web.
4. What is meant by trophic levels?
5. Define autotroph.
6. The 1<sup>st</sup> trophic level consists of \_\_\_\_\_ consumers called \_\_\_\_\_.
7. Name the 2<sup>nd</sup> trophic level (both names).
8. Secondary consumers may be \_\_\_\_\_ eating meat or \_\_\_\_\_ that eat both plants and animals.
9. What is the 3<sup>rd</sup> trophic level called?
10. What is the 4<sup>th</sup> trophic level called?
11. At the 5<sup>th</sup> trophic level would be \_\_\_\_\_ consumers that eat \_\_\_\_\_ consumers.
12. Give an example of 3 detritivores. On what do they feed?
13. What organism feeds on dead plants and animals and helps recycle them?
14. Both \_\_\_\_\_ and \_\_\_\_\_ act as decomposers
15. Can an organism fill more than one trophic level --- yes or no? Give an example.

### Numbers of Organisms:

In any food web, energy is lost each time one organism eats another. Because of this, there have to be many more plants than there are plant-eaters. There are more autotrophs than heterotrophs, and more plant-eaters than meat-eaters. Each level has about **10% of the energy** available to it from the previous level because **some of the energy is lost as heat** at each level. Although there is **intense competition** between animals, there is also **interdependence**. When one **species goes extinct**, it can affect an entire chain of other species and have unpredictable consequences.















1. In food chains and webs, what trophic level must you have more of than others?
2. Each trophic level has how much LESS energy?
3. What may happen if a species goes extinct?

**Equilibrium**

As the number of **carnivores in a community increases**, they eat more and more of the herbivores, decreasing the herbivore population. It then becomes harder and harder for the carnivores to find herbivores to eat, and the population of carnivores decreases. In this way, the carnivores and herbivores stay in a **relatively stable equilibrium**, each limiting the other's population. A similar equilibrium exists between plants and plant-eaters.

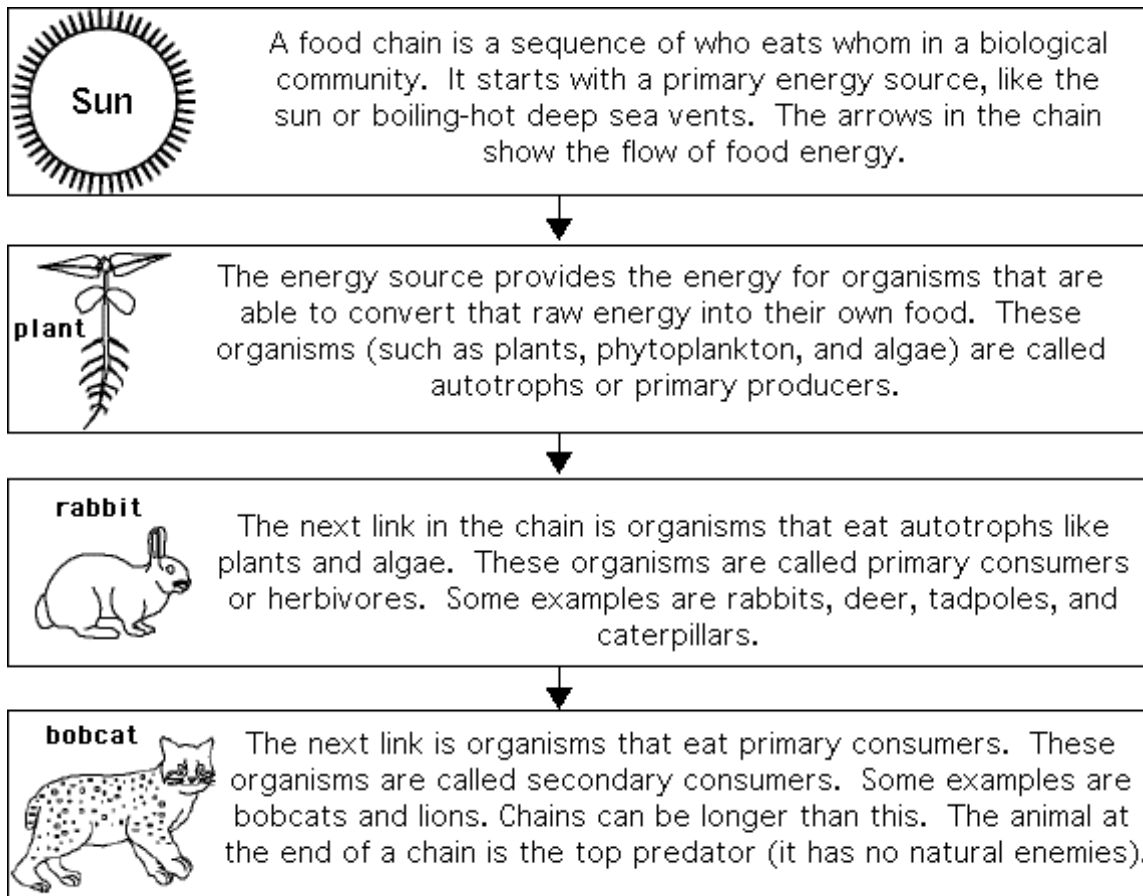
**Complete the Food Chains Worksheet**

Circle the organisms that complete the food chains below.

 Sun	a. plankton b. alligator c. fish d. grass e. chicken	 zebra	a. spider b. guppy c. lion d. wheat e. human	
 Sun	 algae	a. moth b. snail c. whale d. caterpillar e. snail	a. lion b. starfish c. fish d. grass e. crow	 raccoon
 Sun	 plants	a. javelina b. anaconda c. falcon d. grass e. spider	 jaguar	
 Sun	 grass	a. weasel b. spider c. seaweed d. wolverine e. cricket	 snake	a. sheep b. goat c. ant d. owl e. moose
 Sun	 phytoplankton	a. zooplankton b. algae c. seal d. walrus e. moss	a. jellyfish b. spider c. krill d. starfish e. clam	 humpback whale

**Food Chain Worksheet**

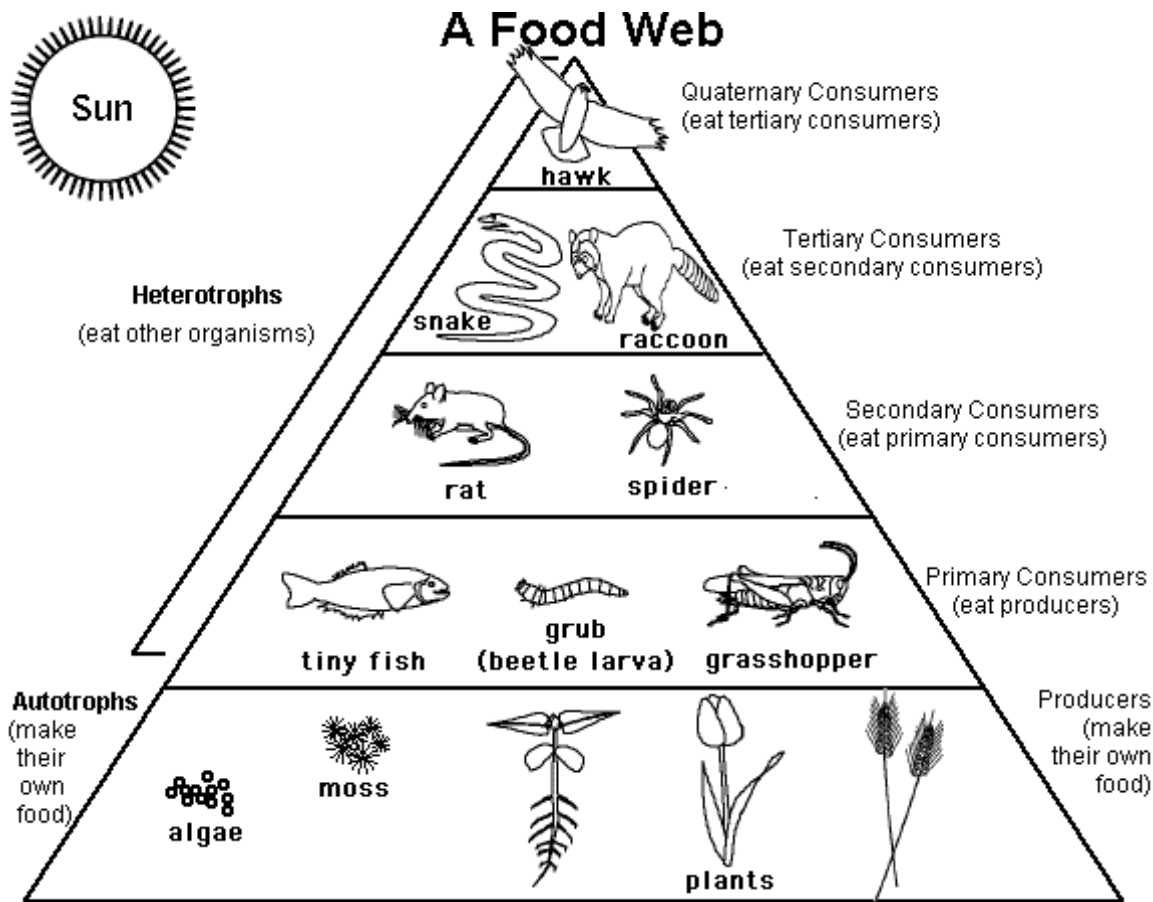
Read the passage then answer the questions below.

**Questions**

1. What do the arrows in a food chain represent? \_\_\_\_\_  
\_\_\_\_\_
2. A food chain starts with an \_\_\_\_\_ source.
3. Organisms that make their own food are called \_\_\_\_\_  
or \_\_\_\_\_.
4. Organisms that eat plants are called \_\_\_\_\_  
or \_\_\_\_\_.
5. An animal with no natural enemies is a \_\_\_\_\_.

**Food Web Worksheet**

Read the passage then answer the questions below.



**Questions**

1. There are many more \_\_\_\_\_  
than there are primary consumers.
2. Organisms that eat other organisms are called \_\_\_\_\_.
3. Organisms that make their own food are called \_\_\_\_\_  
or \_\_\_\_\_.
4. Grass is \_\_\_\_\_.
5. Zebras (grass-eaters) are \_\_\_\_\_.
6. Lions (zebra-eaters) are \_\_\_\_\_.

**Food Chain Quiz** - Multiple choice comprehension questions

Color the circle by each correct answer.

<p>1. A plant is ...</p> <ul style="list-style-type: none"> <li><input type="radio"/> A. an autotroph</li> <li><input type="radio"/> B. a heterotroph</li> <li><input type="radio"/> C. a primary producer</li> <li><input type="radio"/> D. A and C</li> </ul>	<p>6. A person who eats a chicken that ate grain is a ...</p> <ul style="list-style-type: none"> <li><input type="radio"/> A. primary producer</li> <li><input type="radio"/> B. primary consumer</li> <li><input type="radio"/> C. secondary consumer</li> <li><input type="radio"/> D. quaternary consumer</li> </ul>
<p>2. A cow is ...</p> <ul style="list-style-type: none"> <li><input type="radio"/> A. a primary consumer</li> <li><input type="radio"/> B. a heterotroph</li> <li><input type="radio"/> C. an herbivore</li> <li><input type="radio"/> D. all of the above</li> </ul>	<p>7. Primary consumers eat ...</p> <ul style="list-style-type: none"> <li><input type="radio"/> A. primary producers</li> <li><input type="radio"/> B. primary consumers</li> <li><input type="radio"/> C. secondary consumers</li> <li><input type="radio"/> D. quaternary consumers</li> </ul>
<p>3. Autotrophs ...</p> <ul style="list-style-type: none"> <li><input type="radio"/> A. make their own food</li> <li><input type="radio"/> B. are the base of the food chain</li> <li><input type="radio"/> C. are primary producers</li> <li><input type="radio"/> D. all of the above</li> </ul>	<p>8. Secondary consumers eat ...</p> <ul style="list-style-type: none"> <li><input type="radio"/> A. primary producers</li> <li><input type="radio"/> B. primary consumers</li> <li><input type="radio"/> C. tertiary consumers</li> <li><input type="radio"/> D. quaternary consumers</li> </ul>
<p>4. A lion that eats a zebra that ate grass is a ...</p> <ul style="list-style-type: none"> <li><input type="radio"/> A. primary producer</li> <li><input type="radio"/> B. primary consumer</li> <li><input type="radio"/> C. secondary consumer</li> <li><input type="radio"/> D. quaternary consumer</li> </ul>	<p>9. Tertiary consumers eat ...</p> <ul style="list-style-type: none"> <li><input type="radio"/> A. primary producers</li> <li><input type="radio"/> B. primary consumers</li> <li><input type="radio"/> C. secondary consumers</li> <li><input type="radio"/> D. quaternary consumers</li> </ul>
<p>5. A bear that eats a fish that ate bugs that ate algae is a ...</p> <ul style="list-style-type: none"> <li><input type="radio"/> A. primary producer</li> <li><input type="radio"/> B. primary consumer</li> <li><input type="radio"/> C. secondary consumer</li> <li><input type="radio"/> D. tertiary consumer</li> </ul>	<p>10. Quaternary consumers eat ...</p> <ul style="list-style-type: none"> <li><input type="radio"/> A. primary producers</li> <li><input type="radio"/> B. primary consumers</li> <li><input type="radio"/> C. secondary consumers</li> <li><input type="radio"/> D. tertiary consumers</li> </ul>

**Food Chain Quiz #2** - Multiple choice comprehension questions

Color the circle by each correct answer.

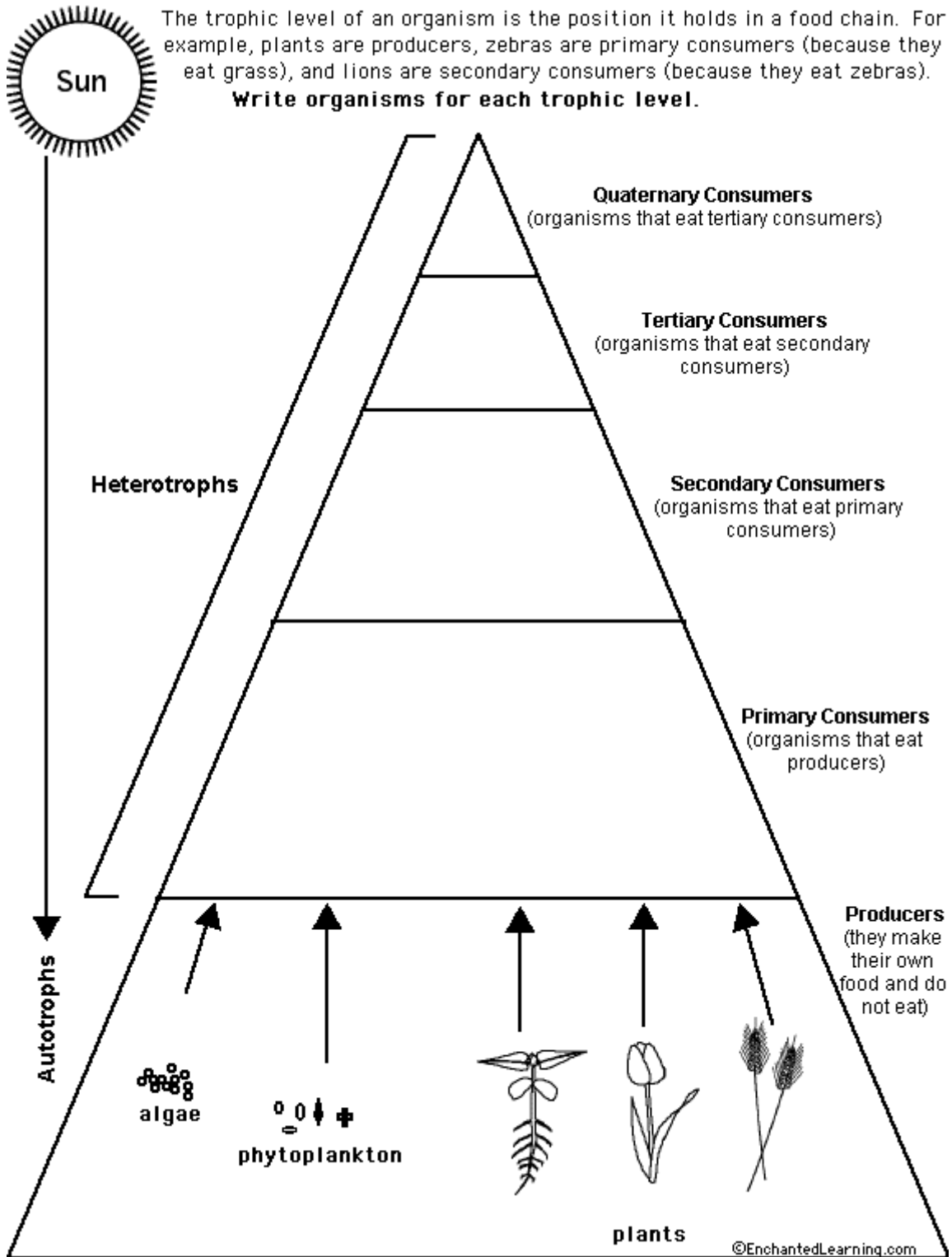
<p>1. A heterotroph ...</p> <ul style="list-style-type: none"> <li>○ A. is an autotroph</li> <li>○ B. eats other organisms</li> <li>○ C. is a primary producer</li> <li>○ D. A and C</li> <li>○ E. none of the above</li> </ul>	<p>6. A top predator...</p> <ul style="list-style-type: none"> <li>○ A. has no natural enemies</li> <li>○ B. is a meat eater</li> <li>○ C. is a heterotroph</li> <li>○ D. all of the above</li> <li>○ E. none of the above</li> </ul>
<p>2. A cow (that eats plants) is ...</p> <ul style="list-style-type: none"> <li>○ A. a primary consumer</li> <li>○ B. a heterotroph</li> <li>○ C. an herbivore</li> <li>○ D. all of the above</li> <li>○ E. none of the above</li> </ul>	<p>7. A detritivore ...</p> <ul style="list-style-type: none"> <li>○ A. is an autotroph</li> <li>○ B. eats decomposing matter</li> <li>○ C. kills animals</li> <li>○ D. all of the above</li> <li>○ E. none of the above</li> </ul>
<p>3. If a person eats a vegetable, the person is acting as ...</p> <ul style="list-style-type: none"> <li>○ A. a primary producer</li> <li>○ B. a primary consumer</li> <li>○ C. a secondary consumer</li> <li>○ D. a tertiary consumer</li> <li>○ E. a quaternary consumer</li> </ul>	<p>8. As nutritional energy passes through the food chain, energy ...</p> <ul style="list-style-type: none"> <li>○ A. is lost</li> <li>○ B. is gained</li> <li>○ C. remains constant</li> <li>○ D. increases, then decreases</li> <li>○ E. decreases, then increases</li> </ul>
<p>4. If a person eats a steak (from a cow), the person is acting as ...</p> <ul style="list-style-type: none"> <li>○ A. a primary producer</li> <li>○ B. a primary consumer</li> <li>○ C. a secondary consumer</li> <li>○ D. a tertiary consumer</li> <li>○ E. a quaternary consumer</li> </ul>	<p>9. There are more primary producers than there are ...</p> <ul style="list-style-type: none"> <li>○ A. primary consumers</li> <li>○ B. secondary consumers</li> <li>○ C. tertiary consumers</li> <li>○ D. quaternary consumers</li> <li>○ E. all of the above</li> </ul>
<p>5. If a person eats a salmon (that ate smaller fish that ate algae), the person is acting as ...</p> <ul style="list-style-type: none"> <li>○ A. a primary producer</li> <li>○ B. a primary consumer</li> <li>○ C. a secondary consumer</li> <li>○ D. a tertiary consumer</li> <li>○ E. a quaternary consumer</li> </ul>	<p>10. There are more tertiary consumers than there are ...</p> <ul style="list-style-type: none"> <li>○ A. primary consumers</li> <li>○ B. secondary consumers</li> <li>○ C. tertiary consumers</li> <li>○ D. quaternary consumers</li> <li>○ E. all of the above</li> </ul>

Match each Food Chain Word to its Definition.

**Draw a line from each word on the left to its definition.**

food chain	The network of all the inter-related food chains in a biological community.
food web	The sequence of who eats whom in a biological community.
autotroph	An organism that gets its energy by eating other organisms.
heterotroph	An organism that makes its food from light or chemical energy without eating.
carnivore	An organism that eats plants.
herbivore	An organism that eats meat.
primary consumer	A consumer that eats primary consumers.
secondary consumer	A meat-eater that eats tertiary consumers.
tertiary consumer	A meat-eater that eats autotrophs.
quaternary consumer	A meat-eater that eats secondary consumers.

**Food Chain Trophic Levels – Worksheet**



Use the following word parts (suffixes and prefixes) to help you learn the meaning of science words.